
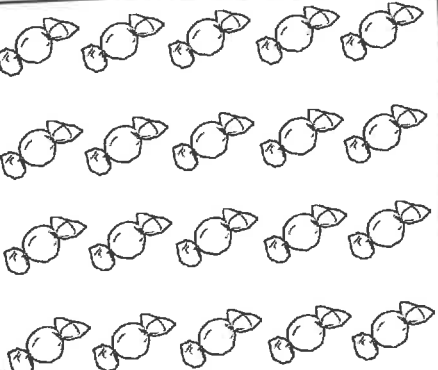



Challenge: Find  $\frac{3}{4}$  of these amounts:

		
<p>Total: <input type="text"/> bananas</p> <p><math>\frac{3}{4}</math> of <input type="text"/> is <input type="text"/></p>	<p>Total: <input type="text"/> sweets</p> <p><math>\frac{3}{4}</math> of <input type="text"/> is <input type="text"/></p>	<p>Total: <input type="text"/> cats</p> <p><math>\frac{3}{4}</math> of <input type="text"/> is <input type="text"/></p>